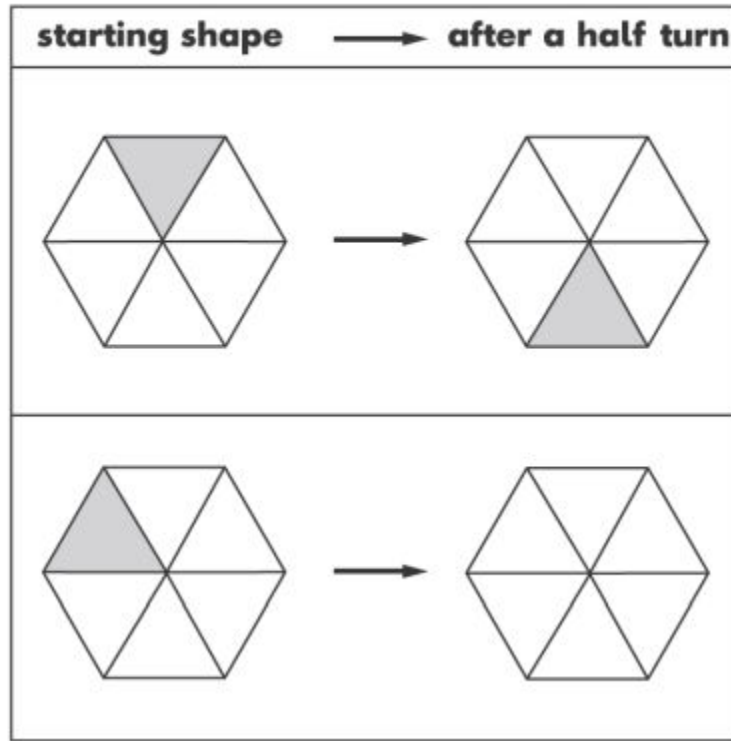


FLIP, TURN AND SLIDE

KS1 – 2001 Paper

1.

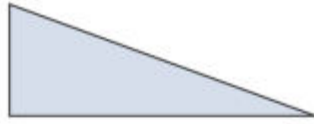
24 Shade the correct triangle in the last hexagon.



KS1 – 2002 Papers

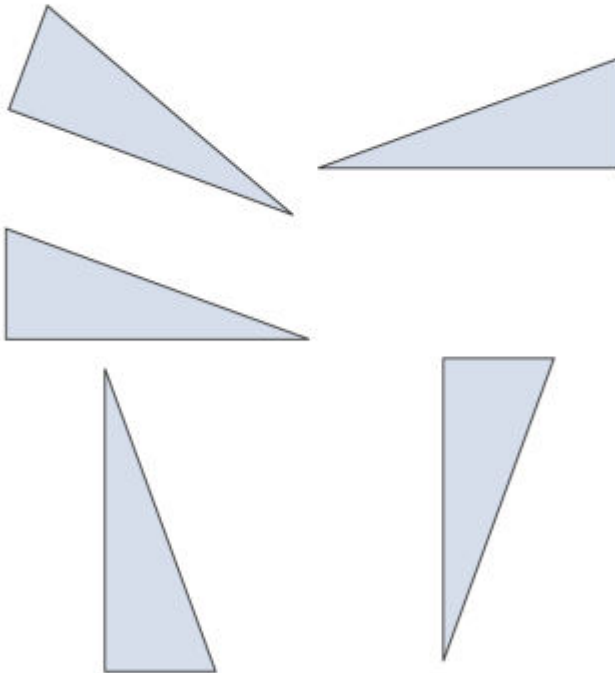
2.

Here is a triangle.



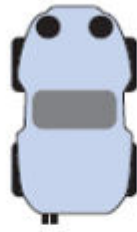
Tom turns it **one quarter turn clockwise**.

28 Tick (✓) the triangle which shows how it looks **after** the turn.



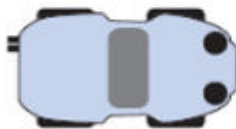
27

Look at this toy car.



Lee turns the car one quarter turn.

Tick (✓) the picture which shows how the car looks **after** the turn.

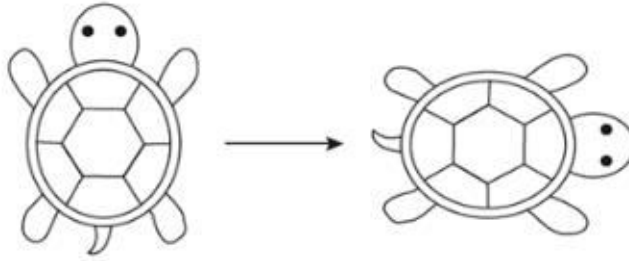


KS1 – 2016 Paper – Reasoning (Second)

4.

23

This turtle is rotated **clockwise**.



How much is the turtle rotated?

Circle your answer.

quarter
turn

half
turn

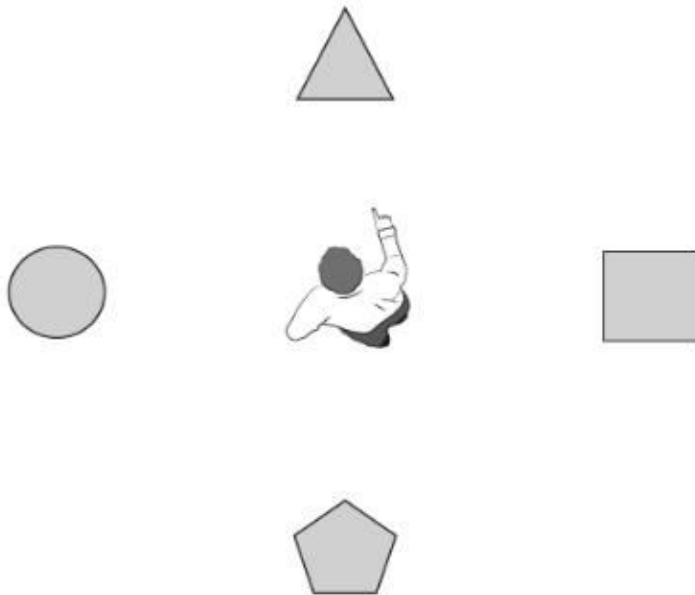
three-quarter
turn

full
turn



1 mark

20 Sam is pointing at the triangle.



He turns a **half turn**.

Tick the shape Sam is pointing at after the half turn.



1 mark